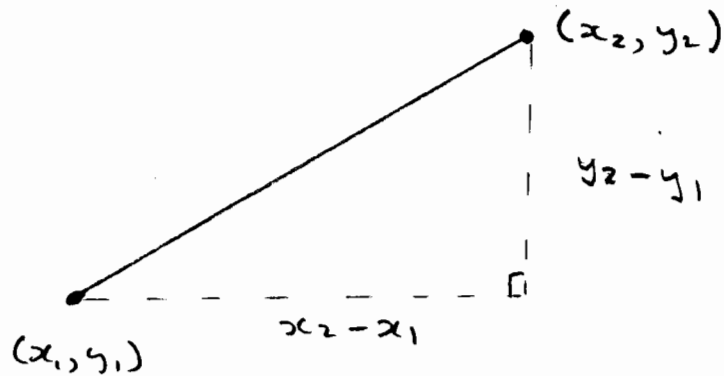


1. Gradient of straight line joining  $(x_1, y_1)$  and  $(x_2, y_2)$



$$\text{gradient } m = \frac{\text{vertical change}}{\text{horizontal change}} = \frac{y_2 - y_1}{x_2 - x_1}$$

$$m = \frac{y_2 - y_1}{x_2 - x_1}$$

---

### Example 1

Find gradient of line joining  $(2, 5)$  and  $(7, 13)$

Let  $(x_1, y_1) = (2, 5)$  and  $(x_2, y_2) = (7, 13)$

$$\text{Then } m = \frac{y_2 - y_1}{x_2 - x_1} = \frac{13 - 5}{7 - 2} = \frac{8}{5}$$

---

### Example 2

Find gradient of line joining  $(-3, 4)$  and  $(7, -5)$

Let  $(x_1, y_1) = (-3, 4)$  and  $(x_2, y_2) = (7, -5)$

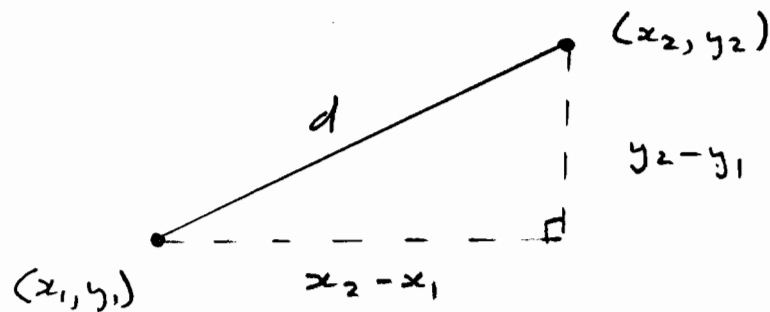
Then

$$m = \frac{y_2 - y_1}{x_2 - x_1} = \frac{-5 - 4}{7 - (-3)} = \frac{-9}{10}$$

$$\therefore m = -\frac{9}{10}$$

---

2. Distance between two points  $(x_1, y_1)$  and  $(x_2, y_2)$



Let distance be  $d$

Then by Pythagoras

$$d^2 = (x_2 - x_1)^2 + (y_2 - y_1)^2$$

$$d = \sqrt{(x_2 - x_1)^2 + (y_2 - y_1)^2}$$

---

Example 1

Find distance between  $(2, 5)$  and  $(7, 13)$

$$d = \sqrt{(x_2 - x_1)^2 + (y_2 - y_1)^2}$$

$$d = \sqrt{(7-2)^2 + (13-5)^2}$$

$$d = \sqrt{5^2 + 8^2} = \sqrt{25+64} = \sqrt{89}$$

---

Example 2

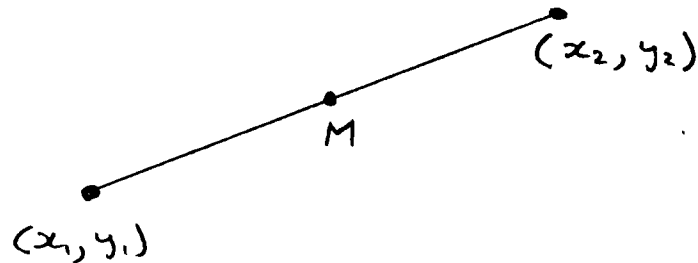
Find distance between  $(-3, 4)$  and  $(7, -5)$

$$d = \sqrt{(7 - (-3))^2 + (-5 - 4)^2}$$

$$d = \sqrt{10^2 + (-9)^2} = \sqrt{100 + 81} = \sqrt{181}$$

---

3. Midpoint between two points  $(x_1, y_1)$  and  $(x_2, y_2)$



The midpoint has coordinates which are the average of the corresponding coordinates of each end point

$$M = \left( \frac{x_1 + x_2}{2}, \frac{y_1 + y_2}{2} \right)$$

---

### Example 1

Find midpoint of  $(2, 5)$  and  $(7, 13)$

$$M = \left( \frac{2+7}{2}, \frac{5+13}{2} \right)$$

$$M = \left( \frac{9}{2}, 9 \right)$$

---

### Example 2

Find midpoint of  $(-3, 4)$  and  $(7, -5)$

$$M = \left( \frac{-3+7}{2}, \frac{4+(-5)}{2} \right)$$

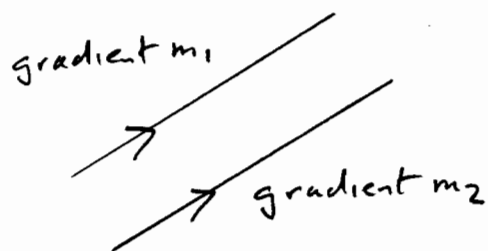
$$M = \left( \frac{-3+7}{2}, \frac{4-5}{2} \right)$$

$$M = \left( 2, -\frac{1}{2} \right)$$

---

4.

Parallel lines have the same gradient



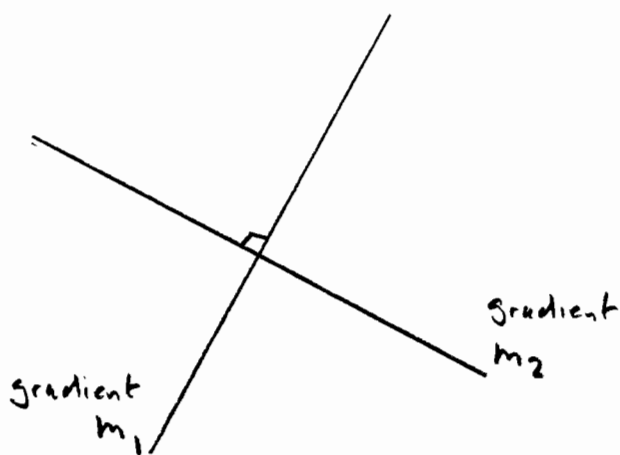
If parallel then  $m_1 = m_2$

Examples of parallel lines

$$\begin{cases} y = 2x + 3 \\ y = 2x - 7 \end{cases}$$

$$\begin{cases} y = -\frac{1}{3}x - 4 \\ y = -\frac{1}{3}x + 1 \end{cases}$$

Perpendicular lines have gradients that multiply to  $-1$



$$m_1 \times m_2 = -1$$

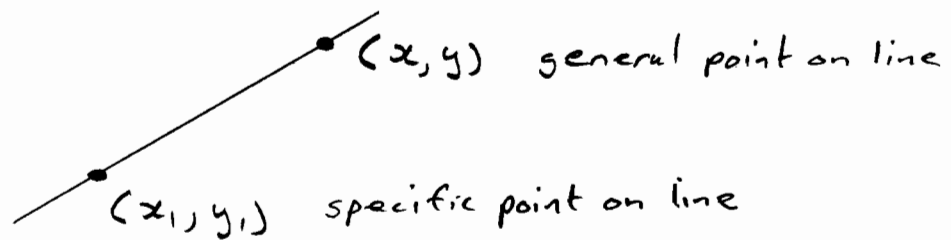
$$\text{or } m_2 = -\frac{1}{m_1}$$

Examples of perpendicular lines

$$\begin{cases} y = 3x + 4 \\ y = -\frac{1}{3}x - 7 \end{cases}$$

$$\begin{cases} y = \frac{5}{4}x + 1 \\ y = -\frac{4}{5}x - 3 \end{cases}$$

5. Equation of line with gradient  $m$  passing through point  $(x_1, y_1)$



$$\text{Gradient } m = \frac{y - y_1}{x - x_1}$$

$$\therefore y - y_1 = m(x - x_1)$$

---

Example 1

Find eqn of line with gradient 5 thro point (7, 4)

Using  $y - y_1 = m(x - x_1)$

$$y - 4 = 5(x - 7)$$

$$y - 4 = 5x - 35$$

$$y = 5x - 35 + 4$$

$$y = 5x - 31$$

---

Example 2

Find eqn of line with gradient  $-\frac{1}{2}$  thro (4, 6)

Using  $y - y_1 = m(x - x_1)$

$$y - 6 = -\frac{1}{2}(x - 4)$$

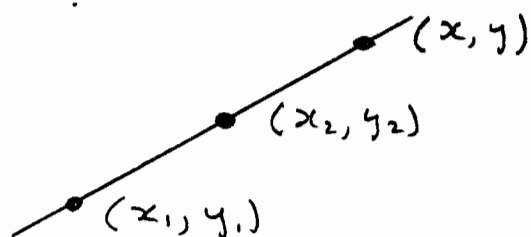
$$y - 6 = -\frac{1}{2}x + 2$$

$$y = -\frac{1}{2}x + 2 + 6$$

$$y = -\frac{1}{2}x + 8$$

---

6. Equation of line through given points  $(x_1, y_1)$  and  $(x_2, y_2)$



$$m = \frac{y_2 - y_1}{x_2 - x_1} \quad \text{but also} \quad m = \frac{y - y_1}{x - x_1}$$

$$\therefore \frac{y_2 - y_1}{x_2 - x_1} = \frac{y - y_1}{x - x_1}$$

$$\Rightarrow \frac{y - y_1}{y_2 - y_1} = \frac{x - x_1}{x_2 - x_1}$$

Example 1 Find equation of line through  $(3, 9)$  and  $(5, 13)$

$$\text{Using } \frac{y - y_1}{y_2 - y_1} = \frac{x - x_1}{x_2 - x_1}$$

$$\frac{y - 9}{13 - 9} = \frac{x - 3}{5 - 3}$$

$$\Rightarrow \frac{y - 9}{4} = \frac{x - 3}{2}$$

$$\Rightarrow y - 9 = 4 \frac{(x - 3)}{2}$$

$$\Rightarrow y - 9 = 2(x - 3)$$

$$\Rightarrow y - 9 = 2x - 6$$

$$\Rightarrow y - 9 = 2x - 6 + 9$$

$$\Rightarrow y = 2x + 3$$