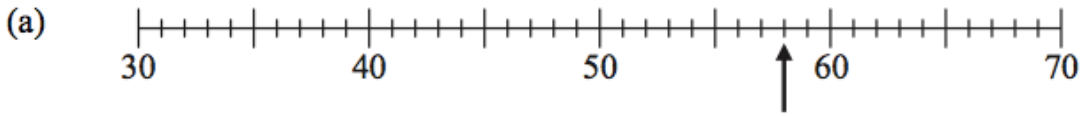
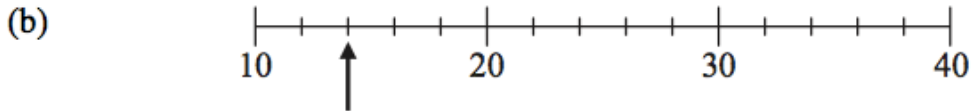


Data - Reading Scales



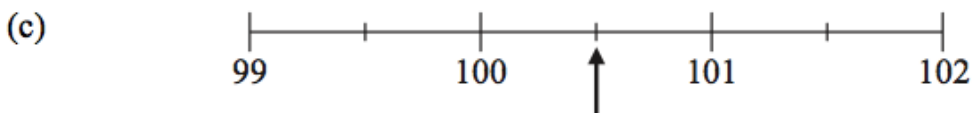
Write down the number marked by the arrow.

.....
(1)



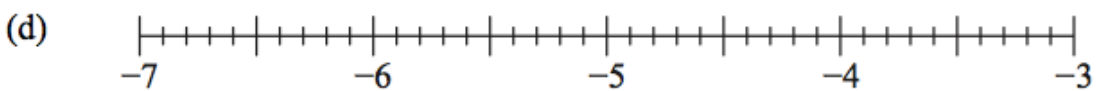
Write down the number marked by the arrow.

.....
(1)



Write down the number marked by the arrow.

.....
(1)

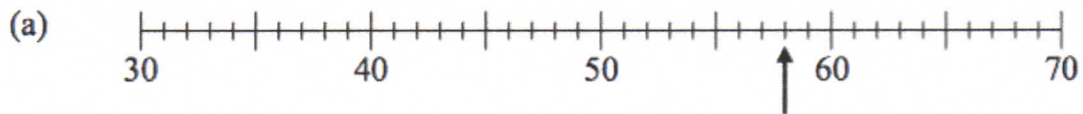


Find the number -5.2 on the number line.

Mark it with an arrow (\uparrow).

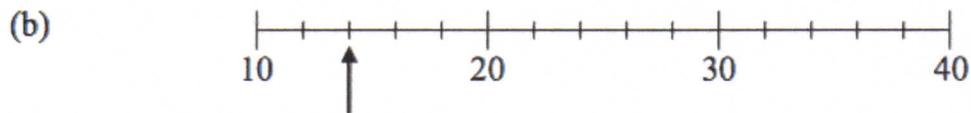
(1)

Data - Reading Scales



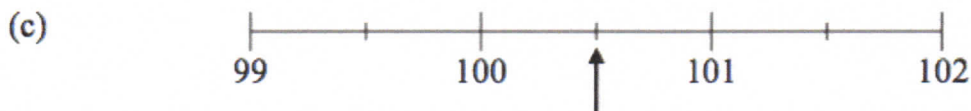
Write down the number marked by the arrow.

58
(1)



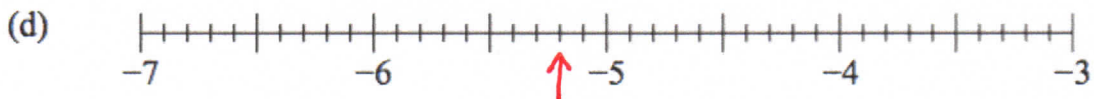
Write down the number marked by the arrow.

14
(1)



Write down the number marked by the arrow.

100.5
(1)



Find the number -5.2 on the number line.

Mark it with an arrow (\uparrow).

(1)