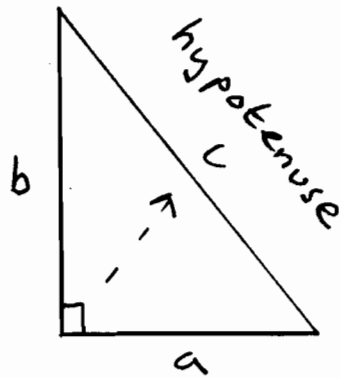


PYTHAGORAS THEOREMTRANSCRIPT

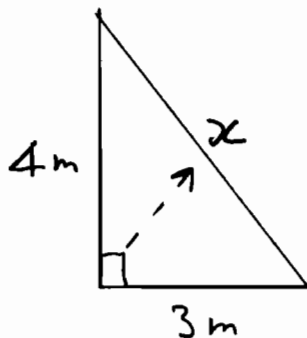
Given any two sides in a right-angled triangle, we can use Pythagoras Theorem to find the third side.



## PYTHAGORAS THEOREM

$$a^2 + b^2 = c^2$$

So Pythagoras Theorem states a relationship between the three sides of a right-angled triangle. Notice that the side that is on its own in the relationship is the hypotenuse, which is the longest side and is found opposite the right-angle.

Example 1Find  $x$ 

By Pythagoras:

$$3^2 + 4^2 = x^2$$

$$9 + 16 = x^2$$

$$25 = x^2$$

$$\sqrt{25} = x$$

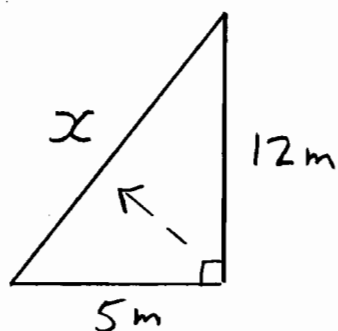
$$x = 5m$$

# PYTHAGORAS THEOREM

2

# TRANSCRIPT

## Example 2



By Pythagoras:

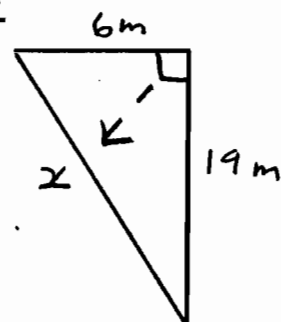
$$5^2 + 12^2 = x^2$$

$$169 = x^2$$

$$\sqrt{169} = x$$

$$x = 13 \text{ m}$$

## Example 4



By Pythagoras:

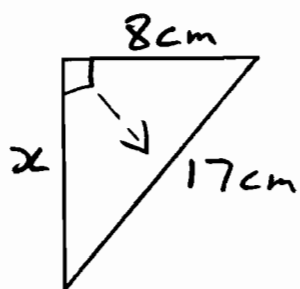
$$6^2 + 19^2 = x^2$$

$$397 = x^2$$

$$\sqrt{397} = x$$

$$x = 19.9 \text{ m}$$

## Example 3



By Pythagoras:

$$x^2 + 8^2 = 17^2$$

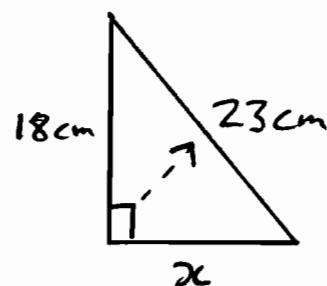
$$x^2 = 17^2 - 8^2$$

$$x^2 = 225$$

$$x = \sqrt{225}$$

$$x = 15 \text{ cm}$$

## Example 5



By Pythagoras:

$$x^2 + 18^2 = 23^2$$

$$x^2 = 23^2 - 18^2$$

$$x^2 = 205$$

$$x = \sqrt{205}$$

$$x = 14.3 \text{ cm}$$

11