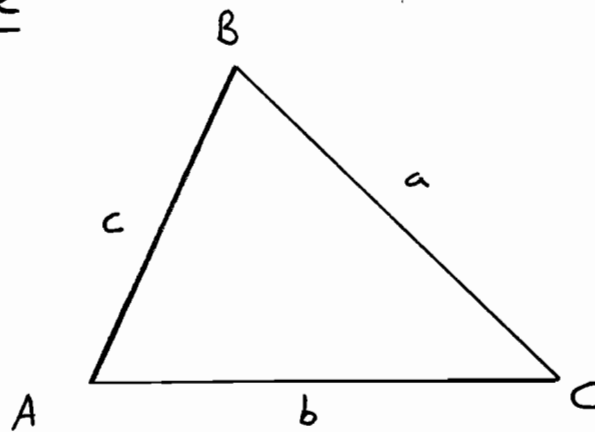
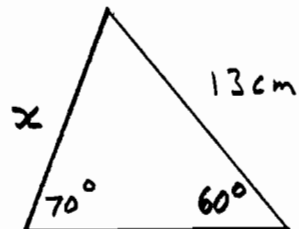


Sine Rule

$$\frac{a}{\sin A} = \frac{b}{\sin B} = \frac{c}{\sin C}$$

Valid for all triangles not just right-angled triangles!

Example 1Finding a side

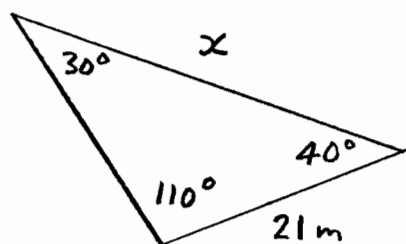
Find  $x$

Sine Rule  $\frac{13}{\sin 70^\circ} = \frac{x}{\sin 60^\circ}$

$$\Rightarrow \frac{13}{\sin 70^\circ} \times \sin 60^\circ = x$$

$$\Rightarrow x = 11.98 \text{ cm}$$

---

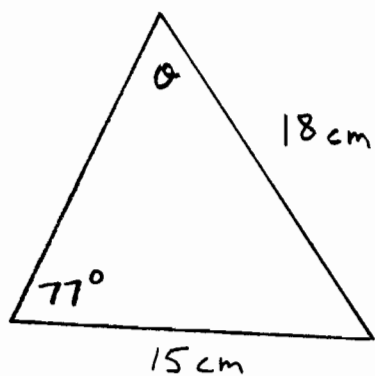
SINE AND COSINE RULESTRANSCRIPTExample 2Finding a sideFind  $x$ 

Sine Rule

$$\frac{21}{\sin 30^\circ} = \frac{x}{\sin 110^\circ}$$

$$\Rightarrow \frac{21}{\sin 30^\circ} \times \sin 110^\circ = x$$

$$\Rightarrow x = 39.47\text{ m}$$

Example 3Finding an angleFind angle  $\theta$ 

Sine Rule

$$\frac{15}{\sin \theta} = \frac{18}{\sin 77^\circ}$$

$$\Rightarrow 15 \sin 77^\circ = 18 \sin \theta$$

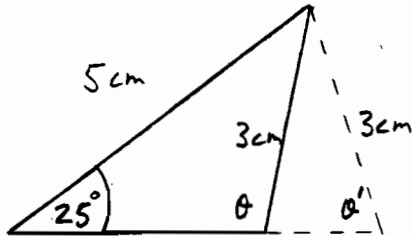
$$\Rightarrow \frac{15 \sin 77^\circ}{18} = \sin \theta$$

$$\Rightarrow \theta = \sin^{-1} \left( \frac{15 \sin 77^\circ}{18} \right)$$

$$\Rightarrow \theta = 54.3^\circ$$

Example 4Finding an angle

This example is called the ambiguous case of sine rule



Two different triangles can be constructed with a  $25^\circ$  angle adjacent to a 5 cm side and opposite a 3 cm side

In this case we cannot be sure whether the angle opposite the 5 cm side is the obtuse angle  $\theta$  or the acute angle  $\theta'$

Sine Rule

$$\frac{3}{\sin 25^\circ} = \frac{5}{\sin \theta}$$

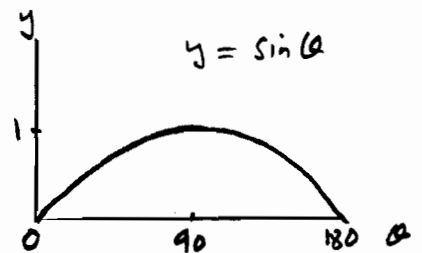
$$\Rightarrow 3 \sin \theta = 5 \sin 25^\circ$$

$$\Rightarrow \sin \theta = \frac{5 \sin 25^\circ}{3}$$

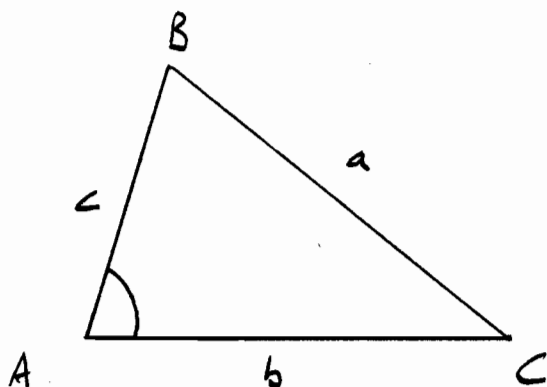
$$\Rightarrow \theta = \sin^{-1} \left( \frac{5 \sin 25^\circ}{3} \right)$$

$$\Rightarrow \theta = 44.8^\circ \text{ or } 180^\circ - 44.8^\circ = 135.2^\circ$$

This is because  $\sin \theta = \sin (180 - \theta)$



To check whether the obtuse angle is possible, we can add  $135.2^\circ$  to  $25^\circ = 160.2^\circ$  to ensure the  $180^\circ$  angle sum for the triangle has not been exceeded.

Cosine Rule

$$a^2 = b^2 + c^2 - 2bc \cos A$$

This formula enables us to calculate a side of any triangle provided that we know the other two sides and the angle between those known sides.

The formula can be rearranged to find the angle form of the cosine rule.

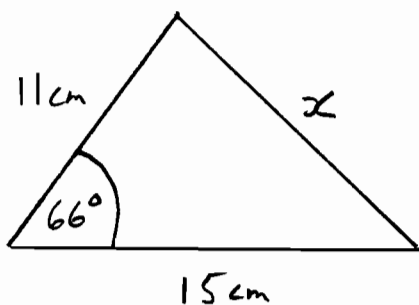
$$a^2 = b^2 + c^2 - 2bc \cos A$$

$$\Rightarrow 2bc \cos A = b^2 + c^2 - a^2$$

$$\Rightarrow \cos A = \frac{b^2 + c^2 - a^2}{2bc}$$

Angle form of cosine rule

$$\cos A = \frac{b^2 + c^2 - a^2}{2bc}$$

SINE AND COSINE RULESTRANSCRIPTExample 5Finding a side

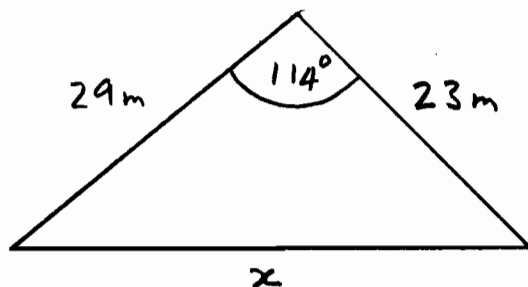
Find x

$$\text{Cosine Rule } a^2 = b^2 + c^2 - 2bc \cos A$$

$$x^2 = 11^2 + 15^2 - 2 \times 11 \times 15 \times \cos 66^\circ$$

$$x^2 = 211.78$$

$$x = 14.55 \text{ cm}$$

Example 6Finding a side

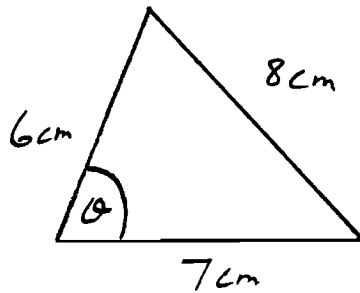
Find x

$$\text{Cosine Rule } a^2 = b^2 + c^2 - 2bc \cos A$$

$$x^2 = 29^2 + 23^2 - 2 \times 29 \times 23 \times \cos 114^\circ$$

$$x^2 = 1912.59$$

$$x = 43.73 \text{ m}$$

SINE AND COSINE RULESTRANSCRIPTExample 7Finding an angleFind  $\theta$ 

Cosine Rule

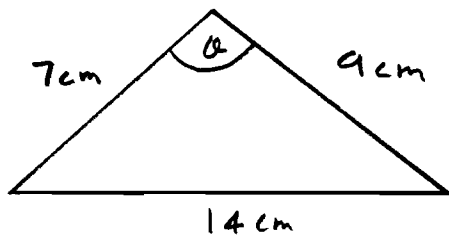
$$\cos A = \frac{b^2 + c^2 - a^2}{2bc}$$

$$\cos \theta = \frac{6^2 + 7^2 - 8^2}{2 \times 6 \times 7}$$

$$\cos \theta = 0.25$$

$$\theta = \cos^{-1} 0.25$$

$$\theta = 75.5^\circ$$

Example 8Finding an angleFind  $\theta$ 

Cosine Rule

$$\cos A = \frac{b^2 + c^2 - a^2}{2bc}$$

$$\cos \theta = \frac{7^2 + 9^2 - 14^2}{2 \times 7 \times 9}$$

$$\cos \theta = -0.5238$$

$$\theta = \cos^{-1}(-0.5238)$$

$$\theta = 121.6^\circ$$